


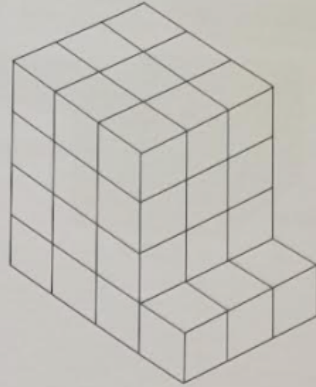


Achievement – Find the volume of the following by counting cubes. Each cube measures  $1\text{ cm}^3$ .


220.



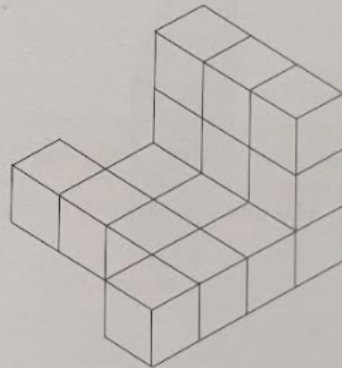
221.



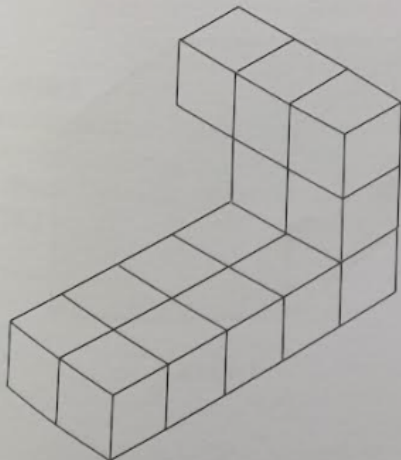
222.




223.



224.



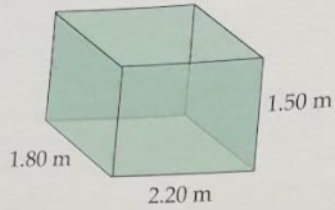
225.



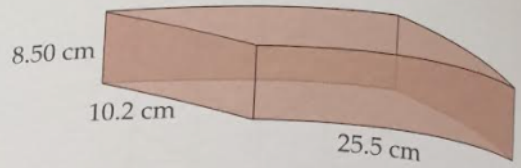


Achievement – Answer the following volume questions. Round your answers to 3 sf.

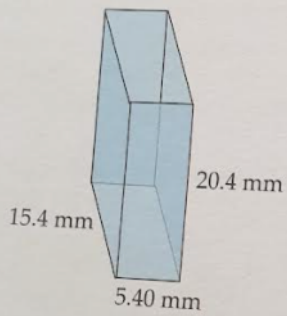
226. Find the volume of



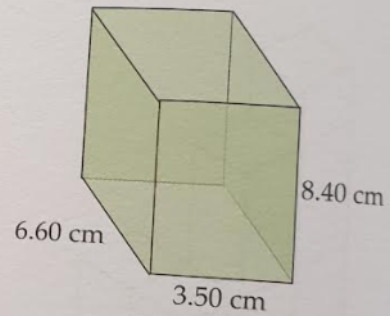
227. Find the volume of



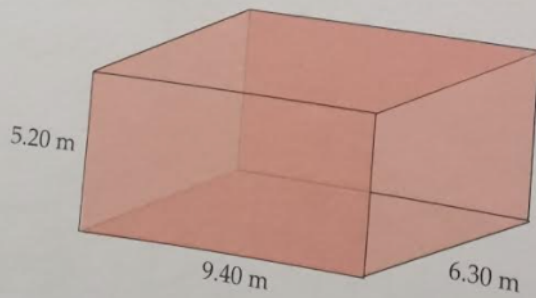
228. Find the volume of



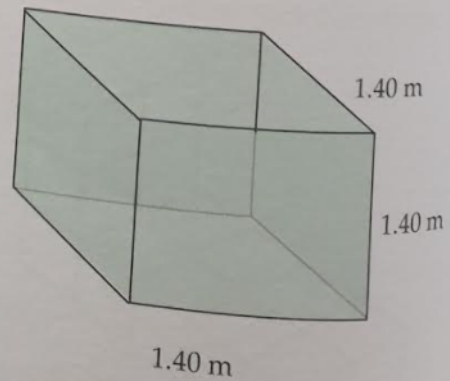
229. Find the volume of



230. Find the volume of



231. Find the volume of



Answers

**Page 143**

220. Vol. =  $12 \text{ cm}^3$

221. Vol. =  $39 \text{ cm}^3$

222. Vol. =  $13 \text{ cm}^3$

223. Vol. =  $17 \text{ cm}^3$

224. Vol. =  $15 \text{ cm}^3$

225. Vol. =  $108 \text{ cm}^3$

**Page 144**

226. Vol. =  $5.94 \text{ m}^3$

227. Vol. =  $2210 \text{ cm}^3$

228. Vol. =  $1700 \text{ mm}^3$

229. Vol. =  $194 \text{ cm}^3$

230. Vol. =  $308 \text{ m}^3$

231. Vol. =  $2.74 \text{ m}^3$