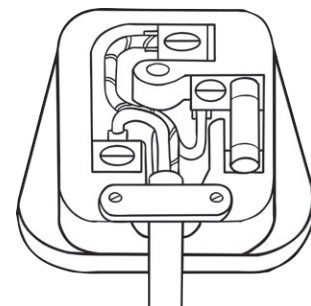


# Introduction to Series Circuits

The rules for drawing circuits are below. You **must** follow these at all times.

1. Always draw circuits using straight lines.
2. Use a pencil and a ruler to draw the lines.



Please complete the following tasks in the spaces below.

1. Draw a series circuit with 1 cell and 2 bulbs.



2. Draw a series circuit with a battery, an open switch, 2 bulbs and an ammeter.



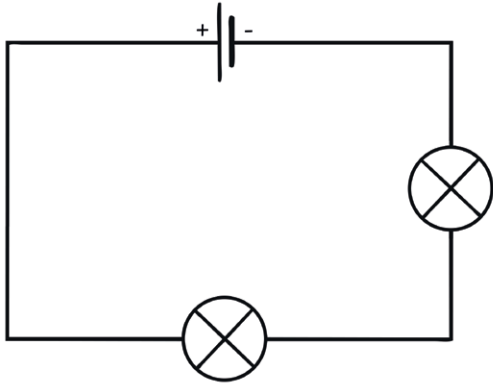
3. Draw a series circuit with 1 cell, 2 bulbs and a closed switch.



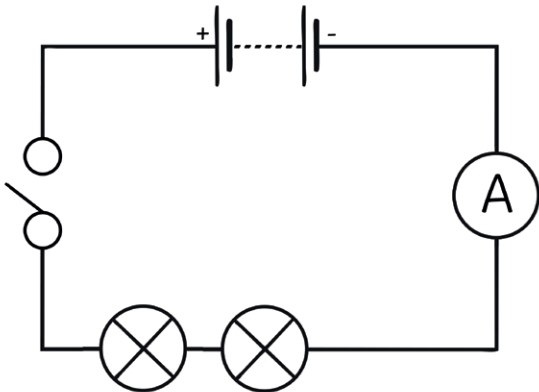
# Introduction to Series Circuits Answers

Please complete the following tasks in the spaces below.

1. Draw a series circuit with 1 cell and 2 bulbs.



2. Draw a series circuit with a battery, an open switch, 2 bulbs and an ammeter.



3. Draw a series circuit with 1 cell, 2 bulbs and a closed switch.

