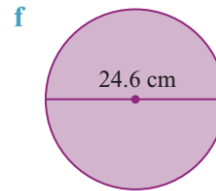
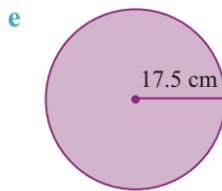
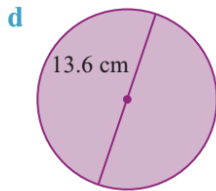
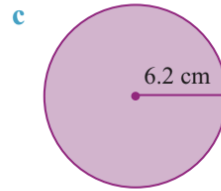
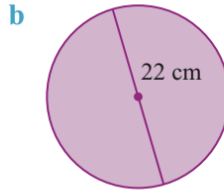
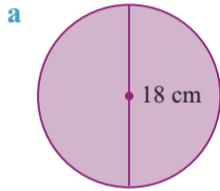


# Find the Area.

**2** Calculate the area of each circle correct to 1 decimal place.



**g** radius = 4.9 cm

**h** diameter = 12.3 cm

**i** radius = 15.1 cm