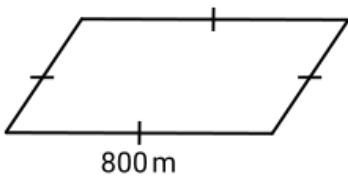


Q1

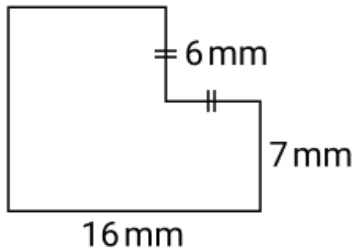
Find the perimeter.



Perimeter = km

Q2

Find the perimeter. mm



Q3

What type of angle is this?



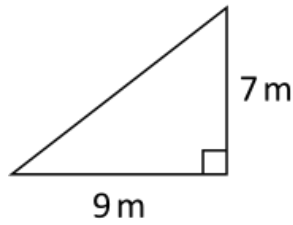
acute right obtuse straight reflex

Q4

The area of a rectangular garden is 21.6 m^2 .
If the length is 5.4 m , find its width.

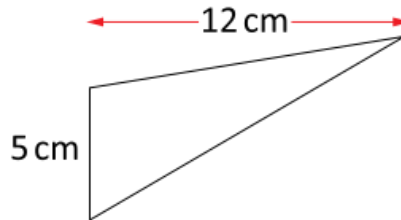
Width = m

Q5



Area = m^2

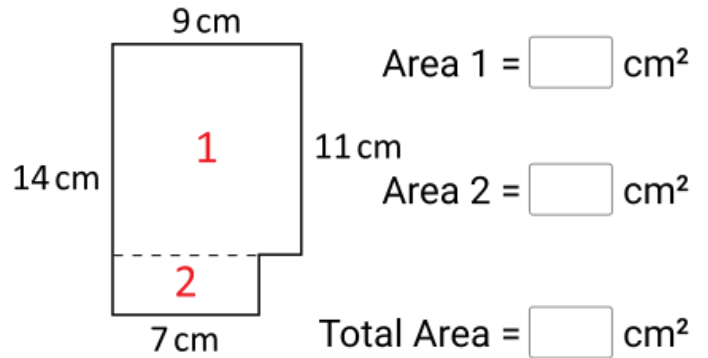
Q6



Area = cm^2

Q7

Find the area of the composite shape.



Q8

If a circle has radius 45 m ,
then the diameter =

m

Q9

A triangle with two equal angles is called:

- a right-angled triangle
- a scalene triangle
- an acute-angled triangle
- an isosceles triangle