

**Q1** Write **9345** in expanded form.

$$9345 = \boxed{\phantom{0000}} + \boxed{\phantom{0000}} + \boxed{\phantom{0000}} + \boxed{\phantom{0000}}$$

**Q2** Write the numeral for

**four thousand, one hundred and sixty-two**

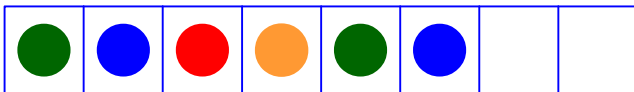
**Q3** When rounded off to the **nearest hundred**, which numbers round to **400**?

- 436     447     449     452  
 489     518     538     569

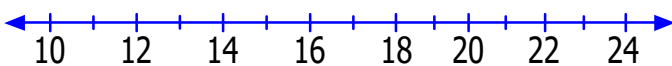
**Q4** Arrange in **ascending** order.

254    297    173    268

**Q5** Complete the pattern below.



**Q6** Use the number line to help.



$$\boxed{\phantom{00}} + 6 = 20$$

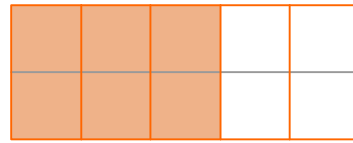
**Q7**  $35 + 21 = \boxed{\phantom{000}}$

**Q8**  $53 - 17 = \boxed{\phantom{000}}$

**Q9**  $6 \times \boxed{\phantom{00}} = 24$

**Q10**  $\boxed{\phantom{00}} \div 5 = 12$

**Q11** What fraction is shaded?



$$\frac{\boxed{\phantom{00}}}{10} = \frac{\boxed{\phantom{00}}}{5}$$

original fraction      simple fraction

**Q12** Complete:  $\frac{4}{10}$  is   $\frac{1}{3}$

- equal to     less than     more than

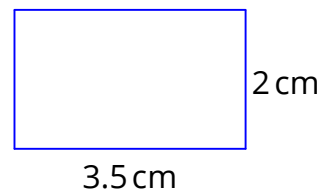

**Q13** Find the change from \$8 if I spend \$5.85.

**Q14** Arrange in **descending** order.

184    149    114    123

**Q15** Find the **change** from \$2 if I spend \$1.30.

**Q16** Find the **perimeter** of this rectangle.




**Q17** **September 2016**

M	T	W	T	F	S	S
29	30	31	1	2	3	4
5	6	7	8	9	10	11
12	13	14	15	16	17	18
19	20	21	22	23	24	25
26	27	28	29	30	1	2
3	4	5	6	7	8	9

What day of the week is Sep 15?

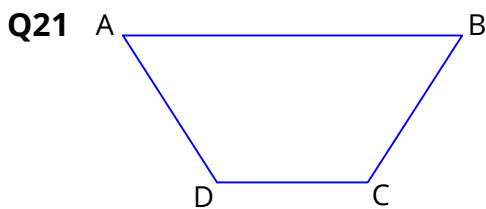
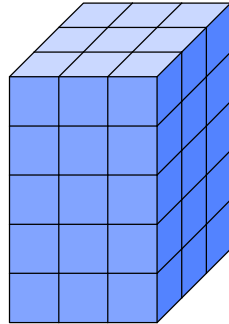
What day of the week is Oct 2?

**Q18** Write as metres and centimetres.

381 cm =  m  cm

**Q19** Complete: 1.5 kg =  grams

**Q20** Find the volume of this solid made up of cubic cm blocks.



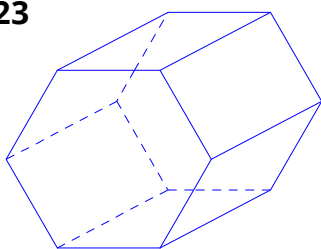
AD is **perpendicular** to DC.  *True* or *False*

AB is **parallel** to DC.  *True* or *False*

**Q22** Which shape has the most sides?

- hexagon
- pentagon
- triangle
- rectangle

**Q23**

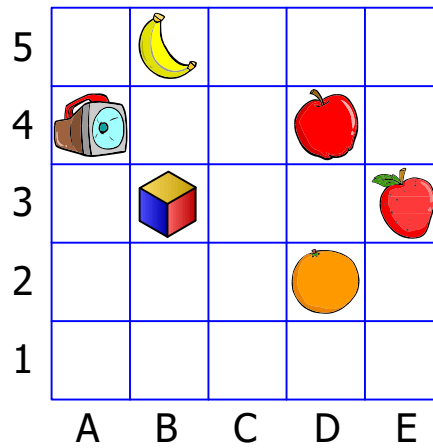


No. of faces =

No. of edges =

No. of corners =


**Q24** Write the **coordinates** of the strawberry and the apple.



strawberry

apple

**Q25**



What's the chance? Match up.

picking

impossible

picking

unlikely

picking

certain

picking or

likely

**Q26** Use the clues to fill the blanks.

5 people like both cats and dogs.

9 people don't like cats.

	like cats	don't like cats
like dogs		<b>6</b>
don't like dogs	<b>4</b>	