

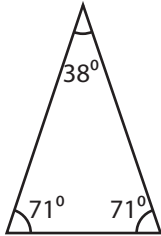
Name : _____

Identifying Triangles

Angles - Numerals: S1

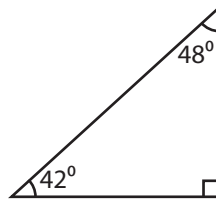
Identify each triangle based on angles. (Acute, Obtuse or Right)

1)

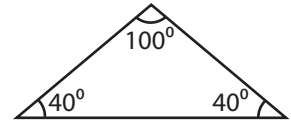


Acute triangle

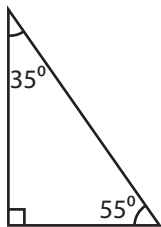
2)



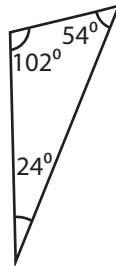
3)



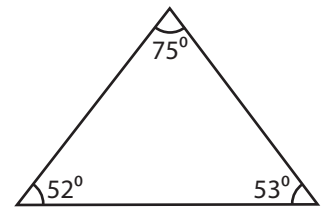
4)



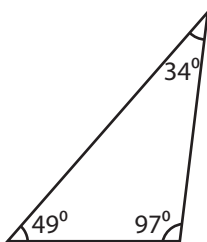
5)



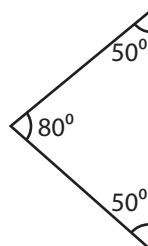
6)



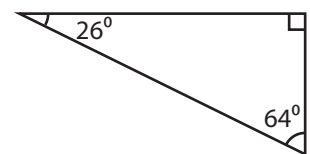
7)



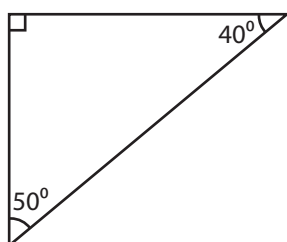
8)



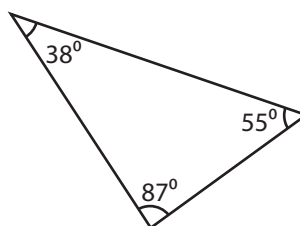
9)



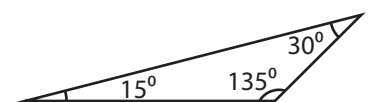
10)



11)



12)



Name : _____

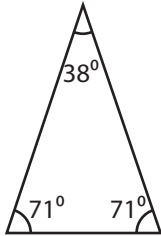
Answer key

Angles - Numerals: S1

Identifying Triangles

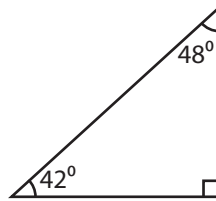
Identify each triangle based on angles. (Acute, Obtuse or Right)

1)



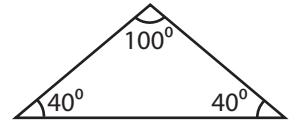
Acute triangle

2)



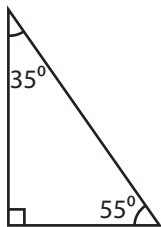
Right triangle

3)



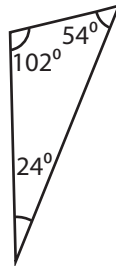
Obtuse triangle

4)



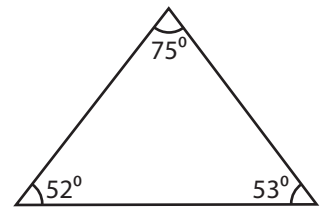
Right triangle

5)



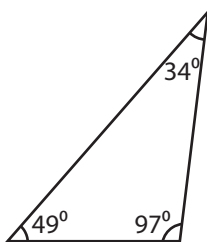
Obtuse triangle

6)



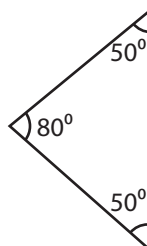
Acute triangle

7)



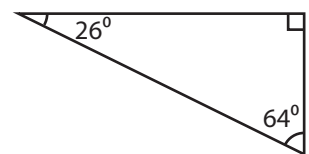
Obtuse triangle

8)



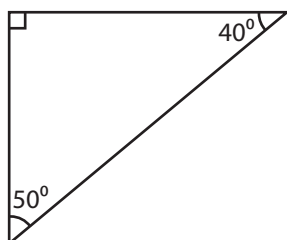
Acute triangle

9)



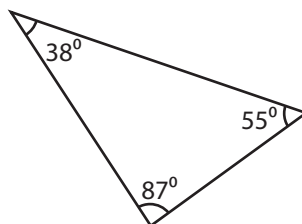
Right triangle

10)



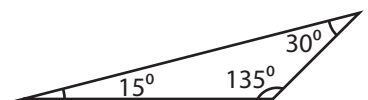
Right triangle

11)



Acute triangle

12)



Obtuse triangle