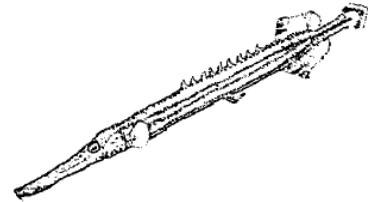
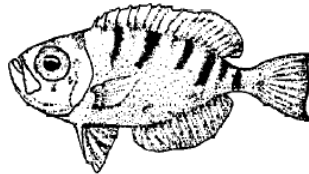
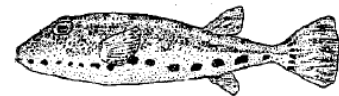

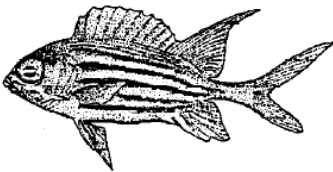
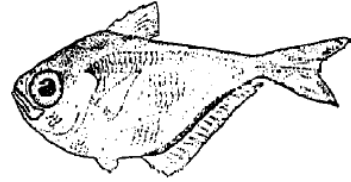

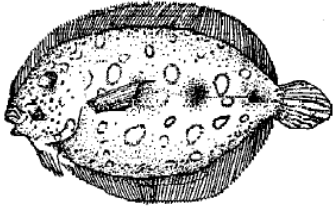


Name: _____

Per: _____ Date: _____

Fish Dichotomous Key

Directions: Use the key below to determine the common name of the fish depicted below.



Step 1

- If fish shape is long and skinny... go to Step 2
- If fish shape is not long and skinny...go to step 3

Step 2

- If the fish has pointed fins, it is a trumpet fish (*Aulostomus maculatus*)
- If the fish has smooth fins, it is a spotted moray eel (*Gymnothorax moringa*)

Step 3

- If fish has both eyes on top of the head...go to step 4
- If fish has one eye on each side of the head...go to step 5

Step 4

- If the fish has long whip-like tail, it is a spotted eagle ray (*Aetobatus narinari*)
- If the fish has short, blunt tail, it is a peacock flounder (*Bothus mancus*)

Step 5

- If fish has spots... go to step 6
- If fish does not have spots... go to step 7

Step 6

- If fish has chin "whiskers," it is a spotted goat fish (*Parupeneus barberinus*)
- If fish does not have chin "whiskers," it is a band-tail puffer (*Arothron meleagris*)

Step 7

- If fish has stripes...go to step 8
- If fish does not have stripes, it is a glassy sweeper (*Pempheris xanthoptera*)

Step 8

- If fish has a v-shaped tail, it is a squirrel fish (*Sargocentron bullisi*)
- If fish has a blunt tail, it is a glass-eye snapper (*Heteropriacanthus cruentatus*)